

Math 1553, Extra Practice for Midterm 1 (through §3.5)

Solutions

1. In this problem, A is an $m \times n$ matrix (m rows and n columns) and b is a vector in \mathbf{R}^m . Circle **T** if the statement is always true (for any choices of A and b) and circle **F** otherwise. Do not assume anything else about A or b except what is stated.

a) **T** **F** The matrix below is in reduced row echelon form.

$$\left(\begin{array}{cccc|c} 1 & 1 & 0 & -3 & 1 \\ 0 & 0 & 1 & -1 & 5 \\ 0 & 0 & 0 & 0 & 0 \end{array} \right)$$

b) **T** **F** If A has fewer than n pivots, then $Ax = b$ has infinitely many solutions.

c) **T** **F** If the columns of A span \mathbf{R}^m , then $Ax = b$ must be consistent.

d) **T** **F** If $Ax = b$ is consistent, then the solution set is a span.

Solution.

a) **True.**

b) **False:** For example, $\begin{pmatrix} 1 & 0 \\ 0 & 0 \end{pmatrix} \begin{pmatrix} x_1 \\ x_2 \end{pmatrix} = \begin{pmatrix} 0 \\ 1 \end{pmatrix}$ has one pivot but has no solutions.

c) **True:** the span of the columns of A is exactly the set of all v for which $Ax = v$ is consistent. Since the span is \mathbf{R}^m , the matrix equation is consistent no matter what b is.

d) **False:** it is a *translate* of a span (unless $b = 0$).

2. a) Is $\begin{pmatrix} 0 \\ 1 \\ 0 \end{pmatrix}$ in the span of $\begin{pmatrix} 0 \\ 1 \\ 1 \end{pmatrix}$ and $\begin{pmatrix} 2 \\ 3 \\ 1 \end{pmatrix}$? Justify your answer.
- b) What best describes $\text{Span} \left\{ \begin{pmatrix} 0 \\ 1 \\ 1 \end{pmatrix}, \begin{pmatrix} 2 \\ 3 \\ 1 \end{pmatrix}, \begin{pmatrix} 0 \\ 1 \\ 0 \end{pmatrix} \right\}$? Justify your answer.
- (I) It is a plane through the origin.
- (II) It is three lines through the origin.
- (III) It is all of \mathbf{R}^3 .
- (IV) It is a plane, plus the line through the origin and the vector $\begin{pmatrix} 0 \\ 1 \\ 0 \end{pmatrix}$.
- c) Does $\text{Span} \left\{ \begin{pmatrix} 1 \\ 0 \\ -1 \end{pmatrix}, \begin{pmatrix} 0 \\ 2 \\ 0 \end{pmatrix}, \begin{pmatrix} -3 \\ 0 \\ 3 \end{pmatrix} \right\} = \mathbf{R}^3$? If yes, justify your answer. If not, write a vector in \mathbf{R}^3 which is not in $\text{Span} \left\{ \begin{pmatrix} 1 \\ 0 \\ -1 \end{pmatrix}, \begin{pmatrix} 0 \\ 2 \\ 0 \end{pmatrix}, \begin{pmatrix} -3 \\ 0 \\ 3 \end{pmatrix} \right\}$.

Solution.

- a) No. We row-reduce the corresponding augmented matrix to get

$$\left(\begin{array}{ccc|c} 0 & 2 & 0 & 0 \\ 1 & 3 & 1 & 1 \\ 1 & 1 & 0 & 0 \end{array} \right) \xrightarrow{RREF} \left(\begin{array}{ccc|c} 1 & 0 & 0 & 0 \\ 0 & 1 & 0 & 0 \\ 0 & 0 & 1 & 1 \end{array} \right)$$

which is inconsistent since it has a pivot in the right column.

- b) It is all of \mathbf{R}^3 . From the RREF in part (a), we know that the matrix $\begin{pmatrix} 0 & 2 & 0 \\ 1 & 3 & 1 \\ 1 & 1 & 0 \end{pmatrix}$ has a pivot in every row, so its columns span \mathbf{R}^3 .
- c) No. The first and third vectors are scalar multiples of each other, so we can see the three vectors cannot span \mathbf{R}^3 . Note that any vector in the span has first coordinate equal to the negative of the third coordinate, so (for example) $\begin{pmatrix} 1 \\ 0 \\ 2 \end{pmatrix}$ is not in the span.

3. Let $v_1 = \begin{pmatrix} 1 \\ k \end{pmatrix}$, $v_2 = \begin{pmatrix} -1 \\ 4 \end{pmatrix}$, and $b = \begin{pmatrix} 1 \\ h \end{pmatrix}$.
- Find all values of h and k so that $x_1v_1 + x_2v_2 = b$ has infinitely many solutions.
 - Find all values of h and k so that b is *not* in $\text{Span}\{v_1, v_2\}$.
 - Find all values of h and k so that there is exactly one way to express b as a linear combination of v_1 and v_2 .

Solution.

Each part uses the row-reduction

$$\left(\begin{array}{cc|c} 1 & -1 & 1 \\ k & 4 & h \end{array} \right) \xrightarrow{R_2=R_2-kR_1} \left(\begin{array}{cc|c} 1 & -1 & 1 \\ 0 & 4+k & h-k \end{array} \right).$$

- The system $(v_1 \ v_2 \mid b)$ has infinitely many solutions if and only if the right column is not a pivot column and there is at least one free variable. This means that $4+k=0$ and $h-k=0$, so $k=-4$ and $h=k$, thus $\boxed{k=-4 \text{ and } h=-4}$.
- The right column is a pivot column when $4+k \neq 0$ and $h-k \neq 0$. Thus $\boxed{k \neq -4 \text{ and } h \neq -4}$.
- The system will have a unique solution when the right column is not a pivot column but both other columns are pivot columns. This is when $4+k \neq 0$, so $\boxed{k \neq -4 \text{ and } h \text{ is any real number}}$.

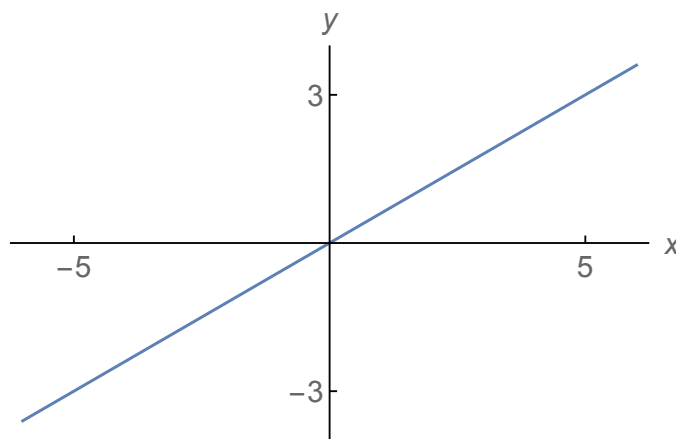
4. Let $A = \begin{pmatrix} 5 & -5 & 10 \\ 3 & -3 & 6 \end{pmatrix}$. Draw the column span of A .

Solution.

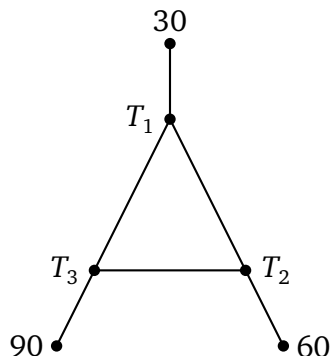
Let v_1, v_2, v_3 be the columns of A . The columns are scalar multiples of each other: $v_2 = -v_1$ and $v_3 = 2v_1$. This means that all three vectors are on the same line through the origin, so

$$\text{Span}\{v_1, v_2, v_3\} = \text{Span}\{v_1\} = \text{Span}\left\{\begin{pmatrix} 5 \\ 3 \end{pmatrix}\right\}.$$

This is the line through the origin and $\begin{pmatrix} 5 \\ 3 \end{pmatrix}$, namely the line $y = \frac{3x}{5}$.



5. The diagram below represents the temperature at points along wires, in celcius.



Let T_1 , T_2 , T_3 be the temperatures at the interior points. Assume the temperature at each interior point is the average of the temperatures of the three adjacent points.

- Write a system of three linear equations whose solution would give the temperatures T_1 , T_2 , and T_3 . Do not solve it.
- Write the system as a vector equation. Do not solve it.
- Write a matrix equation $Ax = b$ that represents this system. Specify every entry of A , x , and b . Do not solve it.

Solution.

- a) The left side system below or right-side system below are both fine.

$$T_1 = \frac{T_2 + T_3 + 30}{3}, \quad \text{or} \quad 3T_1 - T_2 - T_3 = 30.$$

$$T_2 = \frac{T_1 + T_3 + 60}{3}, \quad \text{or} \quad -T_1 + 3T_2 - T_3 = 60.$$

$$T_3 = \frac{T_1 + T_2 + 90}{3}, \quad \text{or} \quad -T_1 - T_2 + 3T_3 = 90.$$

b) $T_1 \begin{pmatrix} 3 \\ -1 \\ -1 \end{pmatrix} + T_2 \begin{pmatrix} -1 \\ 3 \\ -1 \end{pmatrix} + T_3 \begin{pmatrix} -1 \\ -1 \\ 3 \end{pmatrix} = \begin{pmatrix} 30 \\ 60 \\ 90 \end{pmatrix}.$

c) $\begin{pmatrix} 3 & -1 & -1 \\ -1 & 3 & -1 \\ -1 & -1 & 3 \end{pmatrix} \begin{pmatrix} T_1 \\ T_2 \\ T_3 \end{pmatrix} = \begin{pmatrix} 30 \\ 60 \\ 90 \end{pmatrix}.$

6. For each of the following, give an example if it is possible. If it is not possible, justify why there is no such example.
- a) A 3×4 matrix A in RREF with 2 pivot columns, so that for some vector b , the system $Ax = b$ has exactly three free variables.
 - b) A homogeneous linear system with no solution.
 - c) A 5×3 matrix in RREF such that $Ax = 0$ has a non-trivial solution.

Solution.

- a) Not possible. If A had 2 pivot columns and 3 free variables then it would have 5 columns.
- b) Not possible. Any homogeneous linear system has the trivial solution.
- c) Yes. For the matrix A below, the system $Ax = 0$ will have two free variables and thus infinitely many solutions.

$$A = \begin{pmatrix} 1 & 0 & 0 \\ 0 & 0 & 0 \\ 0 & 0 & 0 \\ 0 & 0 & 0 \\ 0 & 0 & 0 \end{pmatrix}.$$

7. Acme Widgets, Gizmos, and Doodads has two factories. Factory A makes 10 widgets, 3 gizmos, and 2 doodads every hour, and factory B makes 4 widgets, 1 gizmo, and 1 doodad every hour.
- If factory A runs for a hours and factory B runs for b hours, how many widgets, gizmos, and doodads are produced? Express your answer as a vector equation.
 - A customer places an order for 16 widgets, 5 gizmos, and 3 doodads. Can Acme fill the order with no widgets, gizmos, or doodads left over? If so, how many hours do the factories run? If not, why not?

Solution.

- a) Let w , g , and d be the number of widgets, gizmos, and doodads produced.

$$\begin{pmatrix} w \\ g \\ d \end{pmatrix} = a \begin{pmatrix} 10 \\ 3 \\ 2 \end{pmatrix} + b \begin{pmatrix} 4 \\ 1 \\ 1 \end{pmatrix}.$$

- b) We need to solve the vector equation

$$\begin{pmatrix} 16 \\ 5 \\ 3 \end{pmatrix} = a \begin{pmatrix} 10 \\ 3 \\ 2 \end{pmatrix} + b \begin{pmatrix} 4 \\ 1 \\ 1 \end{pmatrix}.$$

We put it into an augmented matrix and row reduce:

$$\begin{pmatrix} 10 & 4 & | & 16 \\ 3 & 1 & | & 5 \\ 2 & 1 & | & 3 \end{pmatrix} \rightsquigarrow \begin{pmatrix} 3 & 1 & | & 5 \\ 2 & 1 & | & 3 \\ 10 & 4 & | & 16 \end{pmatrix} \rightsquigarrow \begin{pmatrix} 1 & 0 & | & 2 \\ 2 & 1 & | & 3 \\ 10 & 4 & | & 16 \end{pmatrix} \rightsquigarrow \begin{pmatrix} 1 & 0 & | & 2 \\ 0 & 1 & | & -1 \\ 10 & 4 & | & 16 \end{pmatrix} \\ \rightsquigarrow \begin{pmatrix} 1 & 0 & | & 2 \\ 0 & 1 & | & -1 \\ 0 & 0 & | & 0 \end{pmatrix}$$

These equations are consistent, but they tell us that factory B would have to run for -1 hours! Therefore it can't be done.

8. Consider the system below, where h and k are real numbers.

$$\begin{aligned}x + 3y &= 2 \\ 3x - hy &= k.\end{aligned}$$

- Find the values of h and k which make the system inconsistent.
- Find the values of h and k which give the system a unique solution.
- Find the values of h and k which give the system infinitely many solutions.

Solution.

We form an augmented matrix and row-reduce.

$$\left(\begin{array}{cc|c} 1 & 3 & 2 \\ 3 & -h & k \end{array} \right) \xrightarrow{R_2=R_2-3R_1} \left(\begin{array}{cc|c} 1 & 3 & 2 \\ 0 & -h-9 & k-6 \end{array} \right)$$

- The system is inconsistent precisely when the augmented matrix has a pivot in the rightmost column. This is when $-h-9 = 0$ and $k-6 \neq 0$, so $h = -9$ and $k \neq 6$.
- The system has a unique solution if and only if the left two columns are pivot columns. We know the first column has a pivot, and the second column has a pivot precisely when $-h-9 \neq 0$, so $h \neq -9$ and k can be any real number.
- The system has infinitely many solutions when the system is consistent and has a free variable (which in this case must be y), so $-h-9 = 0$ and $k-6 = 0$, hence $h = -9$ and $k = 6$.

9. Consider the following consistent system of linear equations.

$$\begin{aligned}x_1 + 2x_2 + 3x_3 + 4x_4 &= -2 \\3x_1 + 4x_2 + 5x_3 + 6x_4 &= -2 \\5x_1 + 6x_2 + 7x_3 + 8x_4 &= -2\end{aligned}$$

- a) Find the parametric vector form for the general solution.
- b) Find the parametric vector form of the corresponding *homogeneous* equations.
[Hint: you've already done the work.]

Solution.

- a) We put the equations into an augmented matrix and row reduce:

$$\begin{aligned}\left(\begin{array}{cccc|c}1 & 2 & 3 & 4 & -2 \\3 & 4 & 5 & 6 & -2 \\5 & 6 & 7 & 8 & -2\end{array}\right) &\rightsquigarrow \left(\begin{array}{cccc|c}1 & 2 & 3 & 4 & -2 \\0 & -2 & -4 & -6 & 4 \\0 & -4 & -8 & -12 & 8\end{array}\right) &\rightsquigarrow \left(\begin{array}{cccc|c}1 & 2 & 3 & 4 & -2 \\0 & 1 & 2 & 3 & -2 \\0 & 0 & 0 & 0 & 0\end{array}\right) \\ &\rightsquigarrow \left(\begin{array}{cccc|c}1 & 0 & -1 & -2 & 2 \\0 & 1 & 2 & 3 & -2 \\0 & 0 & 0 & 0 & 0\end{array}\right)\end{aligned}$$

This means x_3 and x_4 are free, and the general solution is

$$\begin{cases} x_1 - x_3 - 2x_4 = 2 \\ x_2 + 2x_3 + 3x_4 = -2 \end{cases} \implies \begin{cases} x_1 = x_3 + 2x_4 + 2 \\ x_2 = -2x_3 - 3x_4 - 2 \\ x_3 = x_3 \\ x_4 = x_4 \end{cases}$$

This gives the parametric vector form

$$\begin{pmatrix} x_1 \\ x_2 \\ x_3 \\ x_4 \end{pmatrix} = x_3 \begin{pmatrix} 1 \\ -2 \\ 1 \\ 0 \end{pmatrix} + x_4 \begin{pmatrix} 2 \\ -3 \\ 0 \\ 1 \end{pmatrix} + \begin{pmatrix} 2 \\ -2 \\ 0 \\ 0 \end{pmatrix}.$$

- b) Part (a) shows that the solution set of the original equations is the translate of

$$\text{Span} \left\{ \begin{pmatrix} 1 \\ -2 \\ 1 \\ 0 \end{pmatrix}, \begin{pmatrix} 2 \\ -3 \\ 0 \\ 1 \end{pmatrix} \right\} \quad \text{by} \quad \begin{pmatrix} 2 \\ -2 \\ 0 \\ 0 \end{pmatrix}.$$

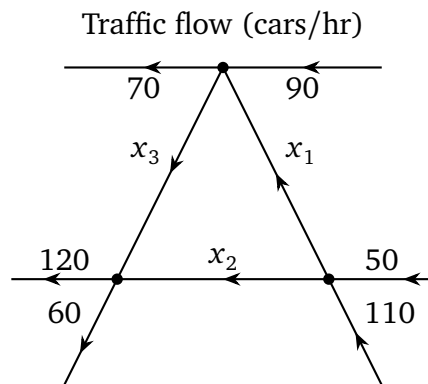
We know that the solution set of the homogeneous equations is the parallel plane through the origin, so it is

$$\text{Span} \left\{ \begin{pmatrix} 1 \\ -2 \\ 1 \\ 0 \end{pmatrix}, \begin{pmatrix} 2 \\ -3 \\ 0 \\ 1 \end{pmatrix} \right\}.$$

Hence the parametric vector form is

$$\begin{pmatrix} x_1 \\ x_2 \\ x_3 \\ x_4 \end{pmatrix} = x_3 \begin{pmatrix} 1 \\ -2 \\ 1 \\ 0 \end{pmatrix} + x_4 \begin{pmatrix} 2 \\ -3 \\ 0 \\ 1 \end{pmatrix}.$$

10. The diagram below represents traffic in a city.



- a) Write a system of three linear equations whose solution would give the values of x_1 , x_2 , and x_3 . Do not solve it.
- b) Write the system of equations as a vector equation. Do not solve it.

Solution.

- a) The number of cars leaving an intersection must equal the number of cars entering.

$$\begin{aligned} x_3 + 70 &= x_1 + 90 \\ x_1 + x_2 &= 160 \\ x_2 + x_3 &= 180. \end{aligned}$$

Or:

$$\begin{aligned} -x_1 + x_3 &= 20 \\ x_1 + x_2 &= 160 \\ x_2 + x_3 &= 180. \end{aligned}$$

b) $x_1 \begin{pmatrix} -1 \\ 1 \\ 0 \end{pmatrix} + x_2 \begin{pmatrix} 0 \\ 1 \\ 1 \end{pmatrix} + x_3 \begin{pmatrix} 1 \\ 0 \\ 1 \end{pmatrix} = \begin{pmatrix} 20 \\ 160 \\ 180 \end{pmatrix}.$